

## Trig 6.3

I have/who has

Identify periodic functions  
Use the graphs of sine and cosine  
functions


sine

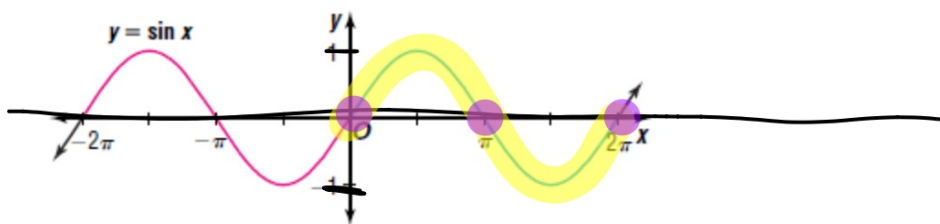
cosine

period

periodic functions

triangle puzzle  
Graphing calculators

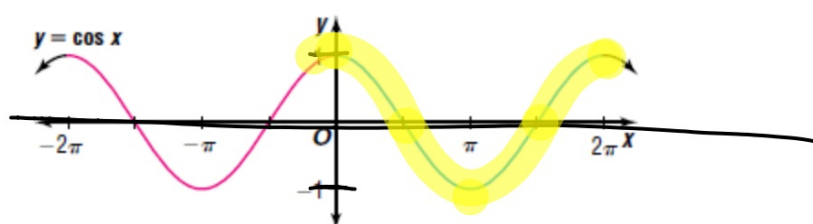




**Properties  
of the Graph  
of  $y = \sin x$**

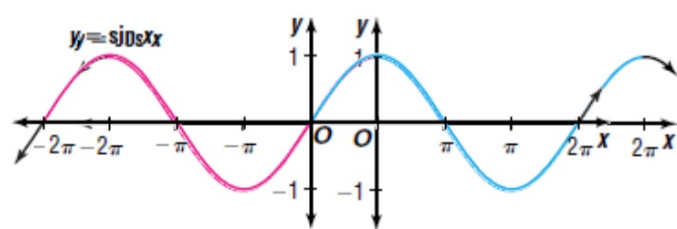
1. The period is  $2\pi$ .
2. The domain is the set of real numbers.
3. The range is the set of real numbers between  $-1$  and  $1$ , inclusive.
4. The  $x$ -intercepts are located at  $\pi n$ , where  $n$  is an integer.
5. The  $y$ -intercept is  $0$ .
6. The maximum values are  $y = 1$  and occur when  $x = \frac{\pi}{2} + 2\pi n$ , where  $n$  is an integer.
7. The minimum values are  $y = -1$  and occur when  $x = \frac{3\pi}{2} + 2\pi n$ , where  $n$  is an integer.

[http://ck022.k12.sd.us/  
images/SineCurve.MOV](http://ck022.k12.sd.us/images/SineCurve.MOV)

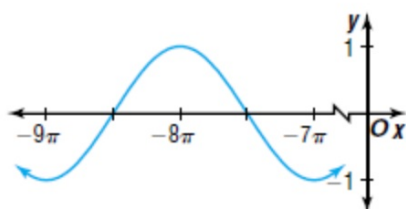
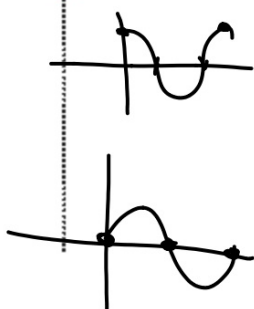


**Properties  
of the Graph  
of  $y = \cos x$**

1. The period is  $2\pi$ .
2. The domain is the set of real numbers.
3. The range is the set of real numbers between  $-1$  and  $1$ , inclusive.
4. The x-intercepts are located at  $\frac{\pi}{2} + \pi n$ , where  $n$  is an integer.
5. The y-intercept is  $1$ .
6. The maximum values are  $y = 1$  and occur when  $x = \pi n$ , where  $n$  is an even integer.
7. The minimum values are  $y = -1$  and occur when  $x = \pi n$ , where  $n$  is an odd integer.



6 Determine whether the graph represents  $y = \sin x$ ,  $y = \cos x$ , or neither.



Does it have a range  $-1 < y < 1$  ?

Does it have appropriate period? (360 or  $2\pi$ )

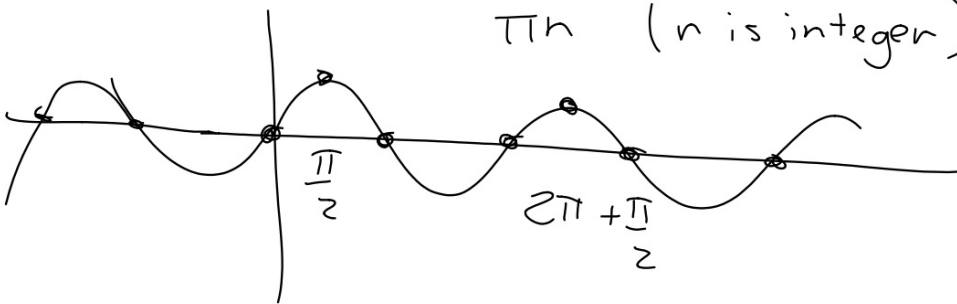
Does it have appropriate x-intercepts?

$$\sin \theta = 1$$

$$\frac{\pi}{2} + 2\pi n$$

$$\sin \theta = 0$$

$$\pi n \quad (n \text{ is integer})$$



$$\cos \theta = -1$$

WB 6.3

